

8.2 PRACTICE**Writing Fractions**

Shade the parts to show the fraction below each figure.

1.



$$\frac{2}{3}$$

2.



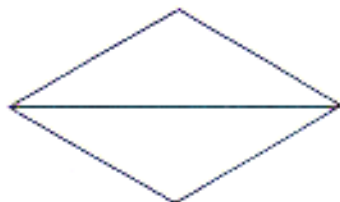
$$\frac{3}{4}$$

3.



$$\frac{4}{6}$$

4.



$$\frac{1}{2}$$

5.



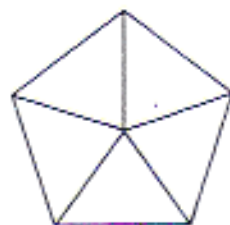
$$\frac{1}{5}$$

6.



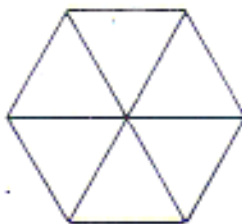
$$\frac{6}{8}$$

7.



$$\frac{2}{5}$$

8.



$$\frac{5}{6}$$

9.



$$\frac{3}{10}$$

* Look at each figure again. Write a fraction for the unshaded part of the figure.

10. _____

11. _____

12. _____

13. _____

14. _____

15. _____